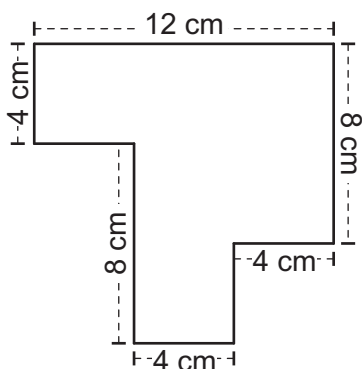


YEAR 5 NUMERACY – SET 9

Name Date

1



The perimeter of this shape is

- ☐ 36 centimetres.
- ☐ 48 centimetres.
- ☐ 52 centimetres.
- ☐ 60 centimetres.

2 $\frac{6}{100}$ has the same value as

1.006

0.006

0.06

0.6

☐


☐

☐

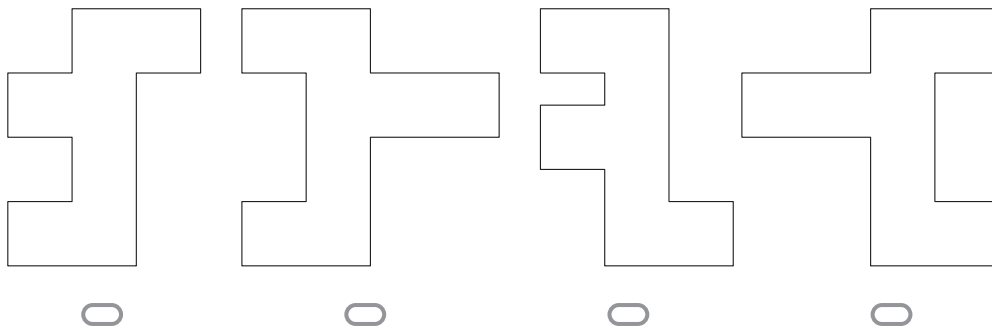
☐

YEAR 5 NUMERACY – SET 9

- 3** Dan held this shape up to the mirror this way.



Which reflection would he see in the mirror?



- 4** Which one of these is a multiple of both 2 and 5?

12

☐

15

☐

20

☐

25

☐

- 5** Emily is swimming 400 metres at the school carnival.

The pool is 25 metres long.

How many lengths will she swim?

8

☐

12

☐

16


☐

20

☐

YEAR 5 NUMERACY – SET 9

6



Joe is facing north.

He turns clockwise to face east.

What fraction of a full turn has he made?

$\frac{1}{4}$

$\frac{1}{2}$

$\frac{3}{4}$

$\frac{1}{3}$

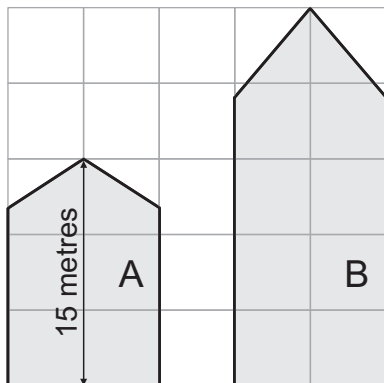
7

When three numbers are added together the answer is 209.

One number is 51 and another number is 86.

What is the third number?

8



This diagram shows the side views of two buildings.

What is the height of building B in metres?

metres